









Lösung: Streichholzrätsel

	
<p>Lösung 1</p>	<p>Lösung 2</p>
	
<p>Lösung 3</p>	<p>Lösung 4</p>
	
<p>Lösung 5</p>	<p>Lösung 6</p>
	
<p>Lösung 7</p>	<p>Lösung 8</p>

Lösung: Mathematische Streichholzrechnungen



Lösung 9



Lösung 10



Lösung 11

Alles herausbekommen?